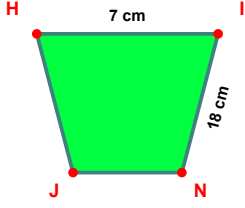
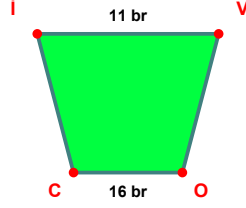


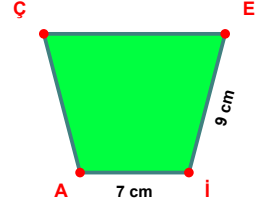
**SORU:** Aşağıdaki şekillerde verilen, kenar uzunlukları farklarını bulunuz.



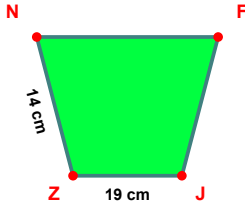
$$|JN| - |HI| = \dots\dots\dots$$



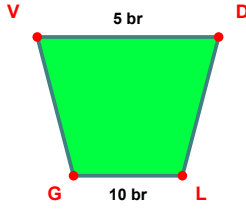
$$|OC| - |IV| = \dots\dots\dots$$



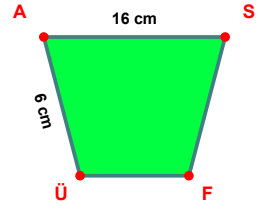
$$|EI| - |AI| = \dots\dots\dots$$



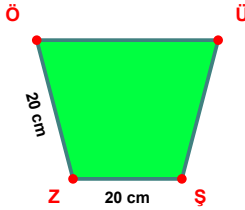
$$|JZ| - |ZN| = \dots\dots\dots$$



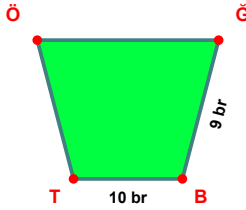
$$|LG| - |VD| = \dots\dots\dots$$



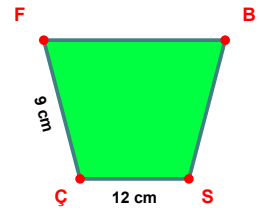
$$|AS| - |ÜA| = \dots\dots\dots$$



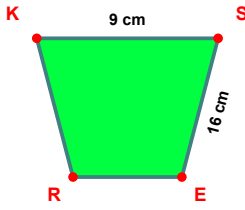
$$|ZÖ| - |ZŞ| = \dots\dots\dots$$



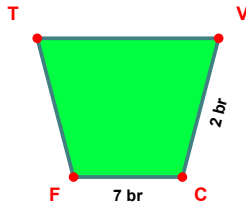
$$|BT| - |GB| = \dots\dots\dots$$



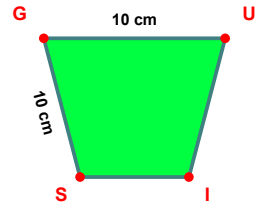
$$|SÇ| - |ÇF| = \dots\dots\dots$$



$$|SE| - |KS| = \dots\dots\dots$$

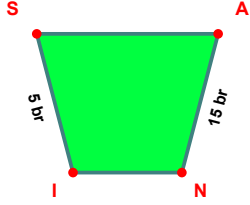


$$|CF| - |VC| = \dots\dots\dots$$

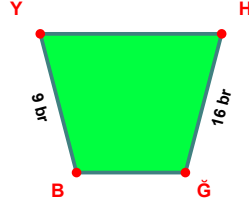


$$|GU| - |SG| = \dots\dots\dots$$

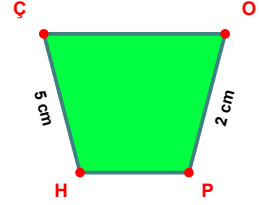
**SORU:** Aşağıdaki şekillerde verilen, kenar uzunlukları farklarını bulunuz.



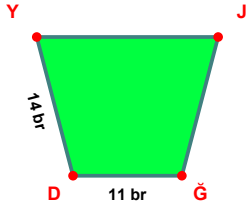
$$|AN| - |SI| = \dots\dots\dots$$



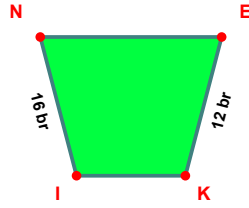
$$|HG| - |BY| = \dots\dots\dots$$



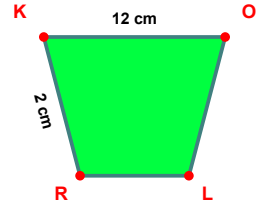
$$|HC| - |OP| = \dots\dots\dots$$



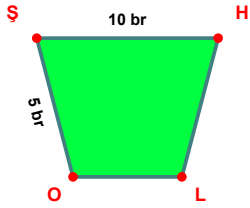
$$|DY| - |GD| = \dots\dots\dots$$



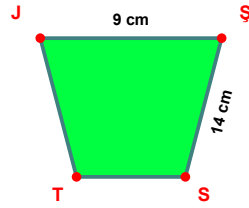
$$|NI| - |EK| = \dots\dots\dots$$



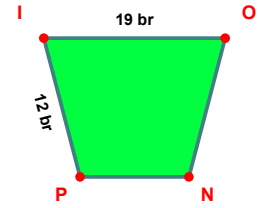
$$|KO| - |RK| = \dots\dots\dots$$



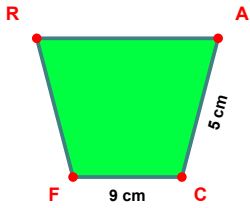
$$|SH| - |OS| = \dots\dots\dots$$



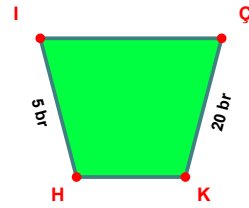
$$|SS| - |JS| = \dots\dots\dots$$



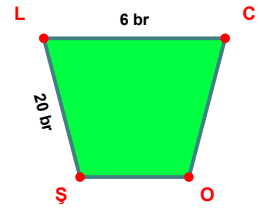
$$|IO| - |PI| = \dots\dots\dots$$



$$|CF| - |AC| = \dots\dots\dots$$



$$|CK| - |HI| = \dots\dots\dots$$



$$|ŞL| - |LC| = \dots\dots\dots$$

SÜREÇ ODAKLI DEĞERLENDİRME ÖLÇEĞİ

Doğru Sayısı: ..... / 24

Öğretmen ilgili kutucuğu işaretler.

Geliştirilmeli (0-8)

İyi (9-14)

Çok İyi (15-20)

Mükemmel (21-24)

☐☐☐☐

Hazırlayan: .....

Bu bölüme sınıfınızın ilgili kazanıma yönelik genel durumuna ilişkin gözlem ve izlenimlerinizi, öğrencilerinizin bu kazanımla ilgili öğrenme eksikliklerini ve bu eksikliklerin giderilmesi amacıyla yaptığınız/yapmayı planladığınız faaliyetleri not edebilirsiniz.

No	Adı - Soyadı	Toplam Puan	Değerlendirme
1			
2			
3			
4			
5			
6			
7			
8			
9			
10			
11			
12			
13			
14			
15			
16			
17			
18			
19			
20			
21			
22			
23			
24			
25			
26			
27			
28			
29			
30			
31			
32			
33			
34			
35			

Hazırlayan: .....